

Please check the examination details below before entering your candidate information

Candidate surname

Other names

Centre Number

Candidate Number

--	--	--	--	--

--	--	--	--	--

Pearson Edexcel Level 1/Level 2 GCSE (9–1)

Monday 10 November 2025

Morning (Time: 1 hour 30 minutes)

Paper
reference

1MA1/3H

Mathematics
PAPER 3 (Calculator)
Higher Tier



You must have: Ruler graduated in centimetres and millimetres, protractor, pair of compasses, pen, HB or B pencil, eraser, calculator, Formulae Sheet (enclosed). Tracing paper may be used.

Total Marks

Instructions

- Use **black** ink or ball-point pen.
- If pencil is used for diagrams/sketches/graphs it must be dark (HB or B).
- **Fill in the boxes** at the top of this page with your name, centre number and candidate number.
- Answer **all** questions.
- Answer the questions in the spaces provided
– *there may be more space than you need.*
- You must **show all your working**.
- Diagrams are **NOT** accurately drawn, unless otherwise indicated.
- **Calculators may be used.**
- If your calculator does not have a π button, take the value of π to be 3.142 unless the question instructs otherwise.

Information

- The total mark for this paper is 80
- The marks for **each** question are shown in brackets
– *use this as a guide as to how much time to spend on each question.*

Advice

- Read each question carefully before you start to answer it.
- Try to answer every question.
- Check your answers if you have time at the end.

Turn over ►

P78240A

©2025 Pearson Education Ltd.
M:1/1/1/1/1/1/1/




Pearson

Answer ALL questions.

Write your answers in the spaces provided.

You must write down all the stages in your working.

1 (a) (i) Work out the value of $\sqrt{\frac{93 - 8.1}{34 + 7.7}}$

Write down all the figures on your calculator display.

.....
(2)

(ii) Write your answer to part (i) correct to 3 significant figures.

.....
(1)

(b) Work out the value of the reciprocal of 1.25

.....
(1)

(Total for Question 1 is 4 marks)

DO NOT WRITE IN THIS AREA

DO NOT WRITE IN THIS AREA

DO NOT WRITE IN THIS AREA



DO NOT WRITE IN THIS AREA

DO NOT WRITE IN THIS AREA

DO NOT WRITE IN THIS AREA

2 Two numbers are in the ratio 5 : 3
The difference between the two numbers is 18

(a) Find the two numbers.

.....,

(2)

Three numbers are in the ratio 4 : 7 : 2
The largest number is 210

(b) Find the sum of these three numbers.

.....

(3)

(Total for Question 2 is 5 marks)

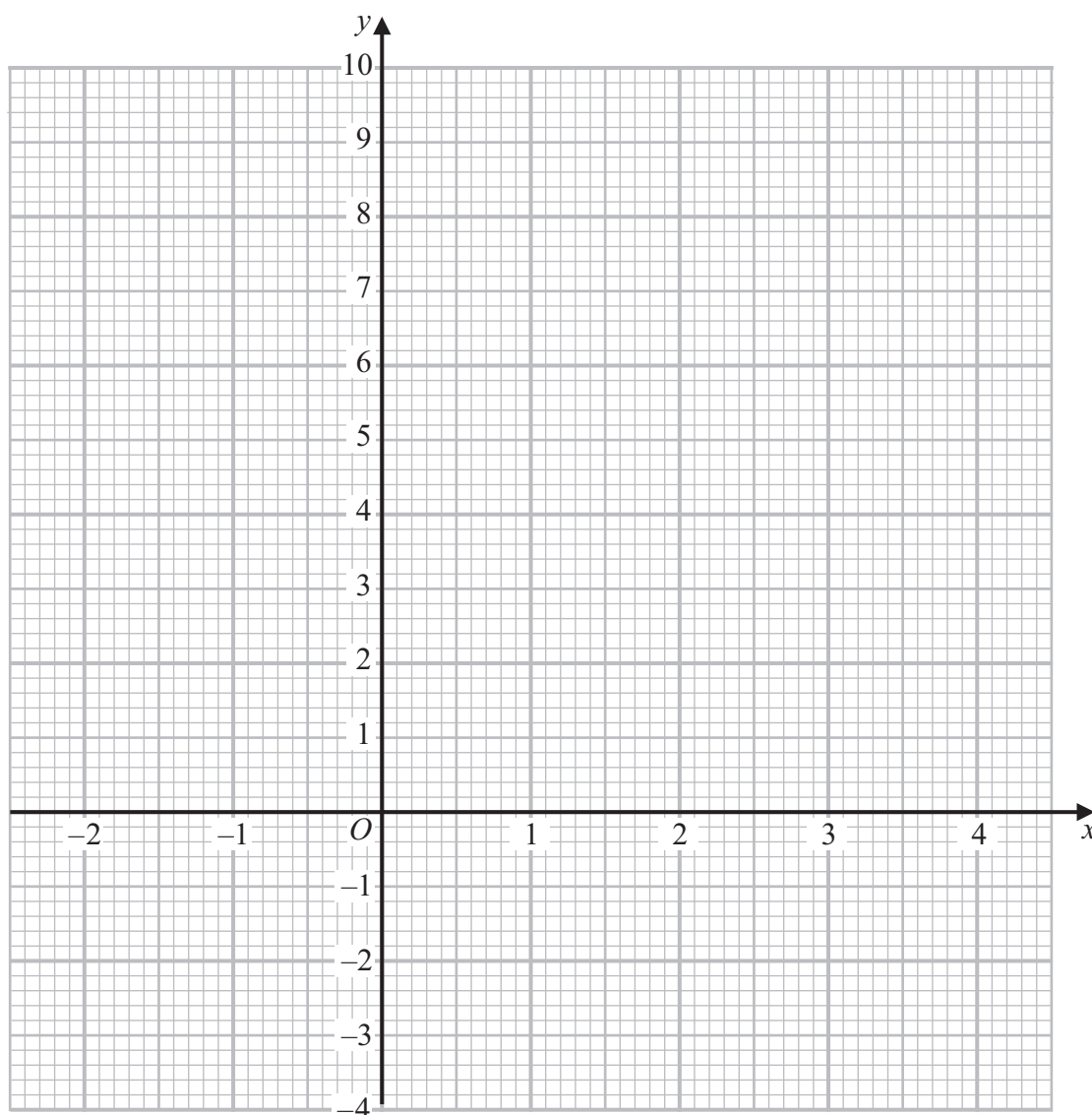


3 (a) Complete the table of values for $y = x^2 - 2x - 1$

x	-2	-1	0	1	2	3	4
y		2			-1		7

(2)

(b) On the grid, draw the graph of $y = x^2 - 2x - 1$ for values of x from -2 to 4



(2)

(c) Use your graph to find estimates for the solutions of $x^2 - 2x - 1 = 3$

(2)

(Total for Question 3 is 6 marks)



DO NOT WRITE IN THIS AREA

DO NOT WRITE IN THIS AREA

DO NOT WRITE IN THIS AREA

4 (a) Calculate the value of $\frac{8.4 \times 10^4}{3.2 \times 10^5}$

Give your answer in standard form.

.....
(2)

$y = 0.83$ correct to 2 decimal places.

(b) Complete the error interval for y .

..... $\leq y <$
(2)

(Total for Question 4 is 4 marks)



- 5 Eric buys a car for £19950
Every year the car loses 5% of the value it had at the start of the year.

Eric works out the value of his car 4 years after he bought it.

Here is Eric's working.

$$\begin{aligned}4 \times 5\% &= 20\% \\0.2 \times 19950 &= 3990 \\19950 - 3990 &= 15960\end{aligned}$$

Eric's method is wrong.

- (a) Explain why.

(1)

- (b) Work out the difference between Eric's answer of £15960 and the real value of the car 4 years after he bought it.

£.....

(4)

(Total for Question 5 is 5 marks)

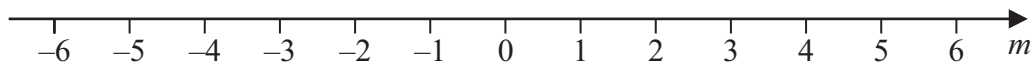


DO NOT WRITE IN THIS AREA

DO NOT WRITE IN THIS AREA

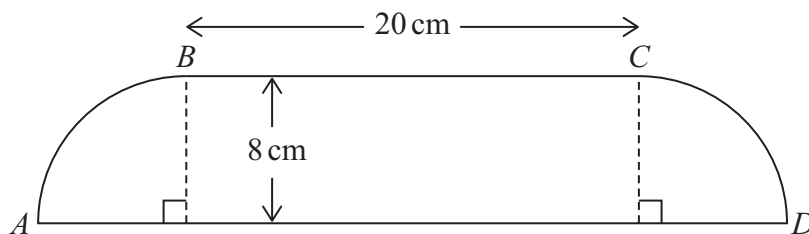
DO NOT WRITE IN THIS AREA

6 On the number line below, show the inequality $m \leq 1$



(Total for Question 6 is 1 mark)

7 In the diagram, AB and CD are quarter circles of radius 8 cm.
 AD is a straight line.
 $BC = 20$ cm



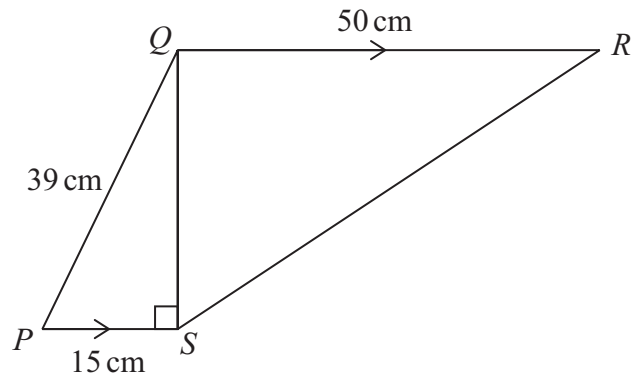
Work out the perimeter of shape $ABCD$.
 Give your answer correct to 3 significant figures.

..... cm

(Total for Question 7 is 3 marks)



8 In the diagram, QR is parallel to PS .



Work out the size of angle QRS .
Give your answer correct to 1 decimal place.

(Total for Question 8 is 4 marks)

DO NOT WRITE IN THIS AREA

DO NOT WRITE IN THIS AREA

DO NOT WRITE IN THIS AREA



- 9 The students in class X and the students in class Y did the same science test.

Here are the marks of the students in class X.

30 31 33 37 40 42 43 43 45 46 46 48
50 52 53 53 55 56 58 63 66 68 69

- (a) Complete the table below to show information about the marks of the students in class X.

Median	48
Range	
Interquartile range	

(3)

Here is some information about the marks of the students in class Y.

Median	45
Range	41
Interquartile range	16

Tanya says that the information in the tables shows that class X did better in the test than class Y.

- (b) Is Tanya correct?
You must give a reason for your answer.

(1)

Amar says that the information in the tables shows that the marks of class X vary more than the marks of class Y.

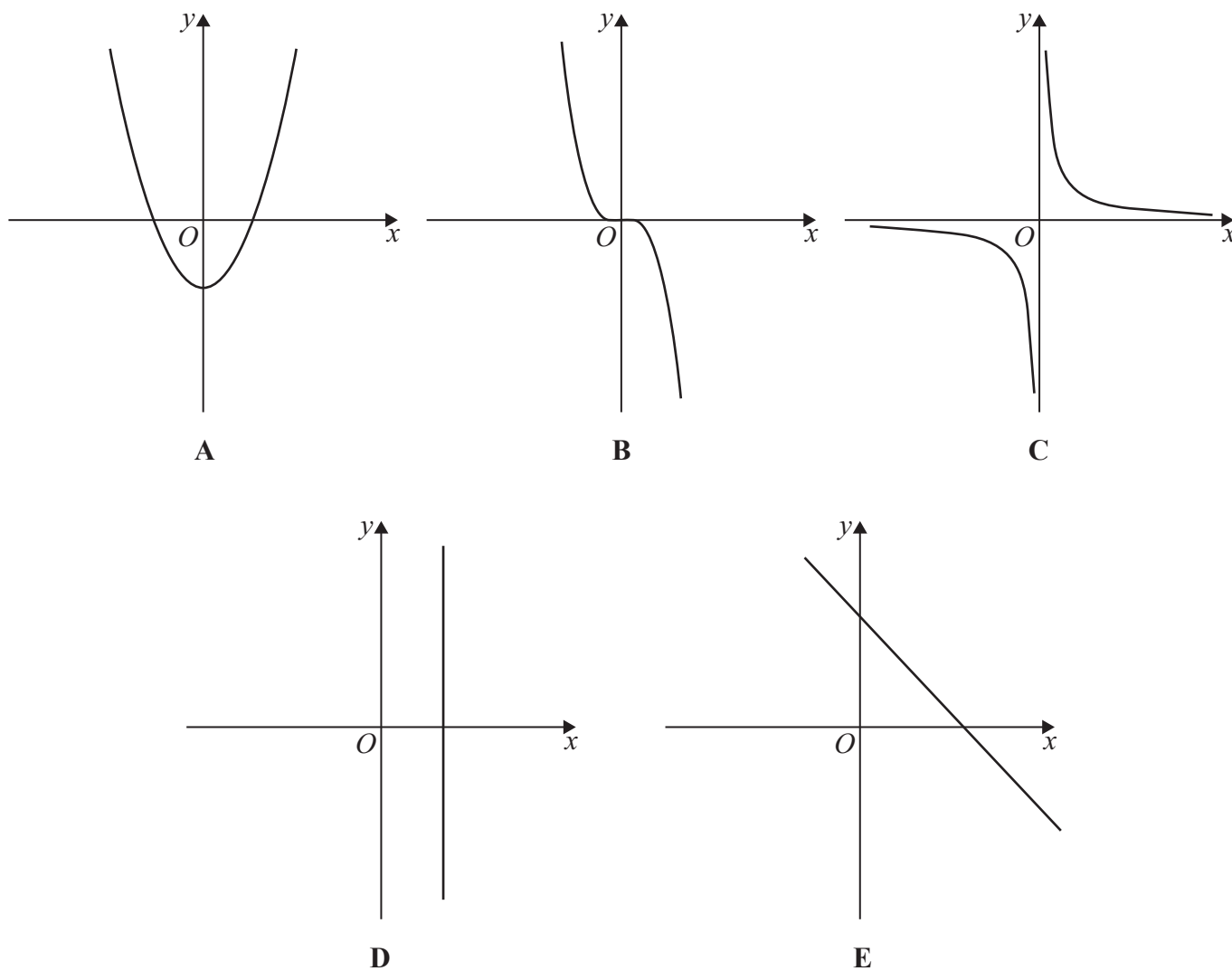
- (c) Is Amar correct?
You must give a reason for your answer.

(1)

(Total for Question 9 is 5 marks)



10 Here are five graphs.



The equation of each of these graphs is given in the table.

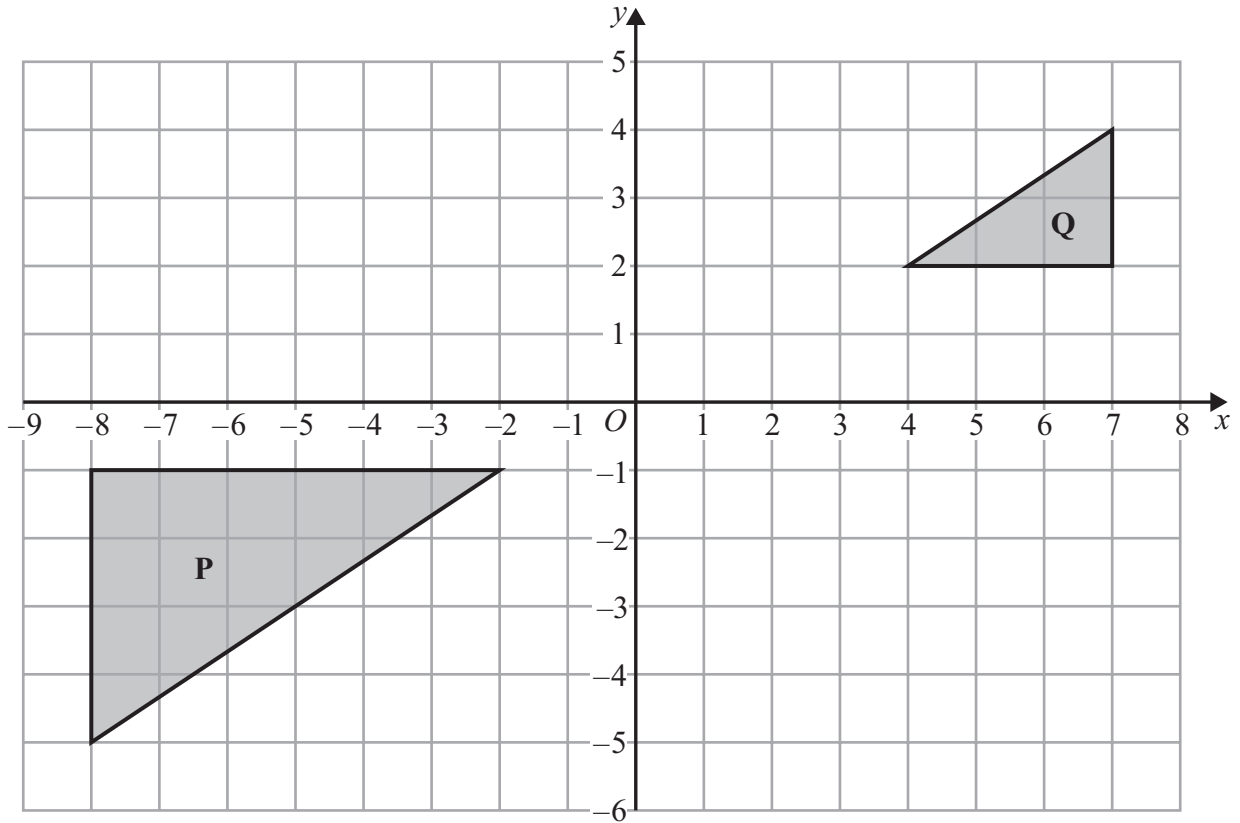
Equation	Graph
$y = \frac{1}{x}$	
$x + y = 6$	
$y = -x^3$	
$y = x^2 - 2$	
$x = 3$	

Match the letter of each graph to its equation.

(Total for Question 10 is 3 marks)



11



Shape **P** can be transformed to shape **Q** by an enlargement with scale factor s and centre (a, b)

Find the value of s , the value of a and the value of b .

$s =$

$a =$

$b =$

(Total for Question 11 is 2 marks)

DO NOT WRITE IN THIS AREA

DO NOT WRITE IN THIS AREA

DO NOT WRITE IN THIS AREA



12 (a) Prove that, for any integer m , where $m > 0$

$$(5m + 2)^2 - (5m - 2)^2 \text{ is a multiple of 20}$$

(3)

Ali says,

“80 is a factor of $(5m + 2)^2 - (5m - 2)^2$ for any integer m , where $m > 0$ ”

(b) Is Ali correct?

You must give a reason for your answer.

(1)

(Total for Question 12 is 4 marks)

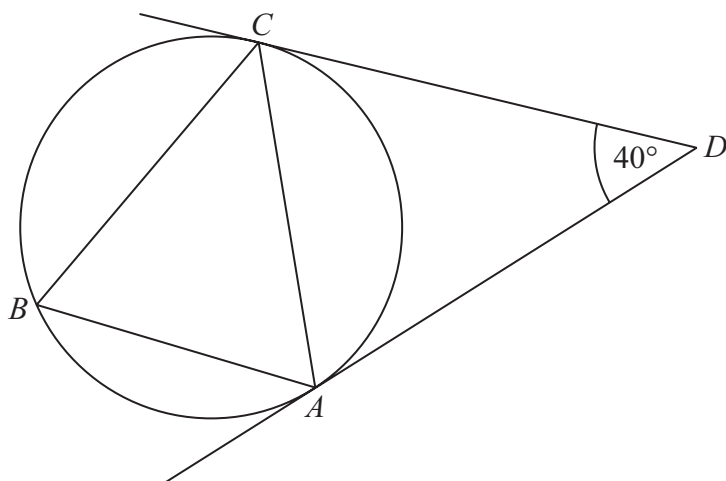


DO NOT WRITE IN THIS AREA

DO NOT WRITE IN THIS AREA

DO NOT WRITE IN THIS AREA

13 A , B and C are three points on a circle.



CD and AD are tangents to the circle.

Find the size of angle ABC .

You must give a reason for each stage of your working.

(Total for Question 13 is 4 marks)



14 $w = 3x - y$

$x = 8.71$ correct to 3 significant figures.

$y = 24.3$ correct to 3 significant figures.

Work out the lower bound for the value of w .
You must show all your working.

.....
(Total for Question 14 is 3 marks)

DO NOT WRITE IN THIS AREA

DO NOT WRITE IN THIS AREA

DO NOT WRITE IN THIS AREA



DO NOT WRITE IN THIS AREA

DO NOT WRITE IN THIS AREA

DO NOT WRITE IN THIS AREA

15 There are only blue counters and red counters in a box.
There are 5 times as many blue counters as red counters.

Ashley takes at random one counter from the box.
He records the colour of the counter, then puts the counter back in the box.
Ashley does this 3 times.

(a) Find the probability that Ashley takes a counter of the same colour all 3 times.

.....
(3)

The number of blue counters in the box is doubled.
The number of red counters in the box is doubled.

Ashley takes 3 counters in the same way as in part (a).

Ashley thinks that the probability that he takes a counter of the same colour all 3 times
is the same as the answer in part (a).

(b) Is Ashley correct?
Give a reason for your answer.

.....
(1)

(Total for Question 15 is 4 marks)



16 (a) Show that the equation $2x^3 + x - 8 = 0$ has a solution between $x = 1$ and $x = 2$

(1)

(b) Show that the equation $2x^3 + x - 8 = 0$ can be written in the form $x = \sqrt[3]{\frac{8-x}{2}}$

(1)

(c) Starting with $x_0 = 1.5$ use the iteration formula $x_{n+1} = \sqrt[3]{\frac{8-x_n}{2}}$ three times to find an estimate for a solution of $2x^3 + x - 8 = 0$ correct to 3 decimal places.

(3)

(Total for Question 16 is 5 marks)



DO NOT WRITE IN THIS AREA

17 Given that

$$y:x^2 = 6:1 \quad \text{and} \quad x + y = 1$$

find the possible values of x and y .

.....
(Total for Question 17 is 5 marks)



- 18 Imran asks 100 people if they speak French or German or Spanish.
He draws a Venn diagram to give information about his results.

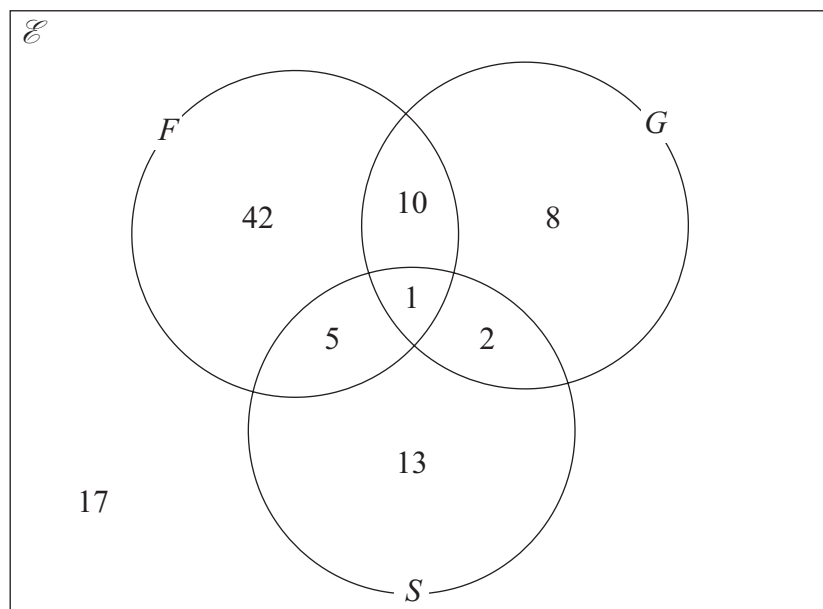
Here is Imran's diagram.

\mathcal{E} = {all 100 people}

F = {people who speak French}

G = {people who speak German}

S = {people who speak Spanish}



The diagram is not fully correct.

- (a) Explain why the diagram cannot be fully correct.

.....

.....

.....

(1)



DO NOT WRITE IN THIS AREA

DO NOT WRITE IN THIS AREA

DO NOT WRITE IN THIS AREA

Jodie asks 200 people which of the social network sites, P, Q and R they use.

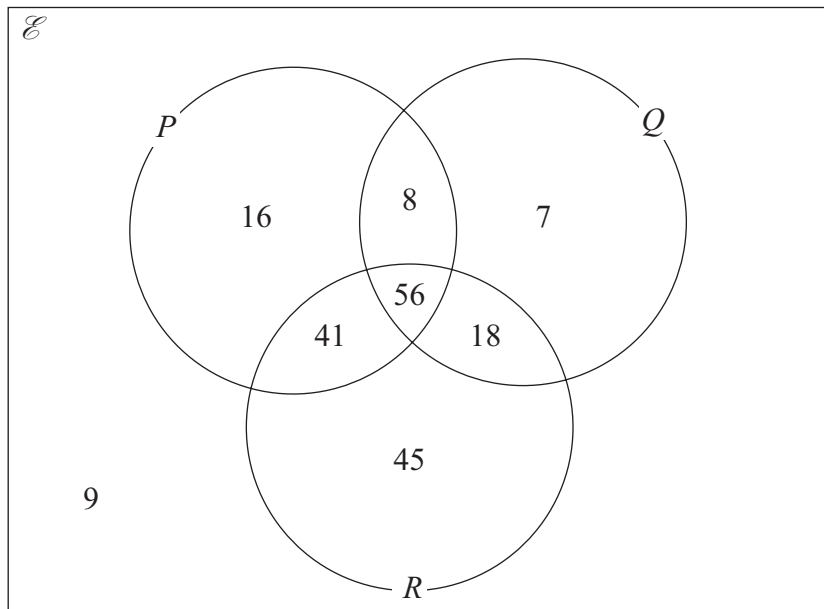
The Venn diagram gives information about her results.

$\mathcal{E} = \{\text{all 200 people}\}$

$P = \{\text{people who use site P}\}$

$Q = \{\text{people who use site Q}\}$

$R = \{\text{people who use site R}\}$



Given that a person selected at random from the 200 people uses site Q,

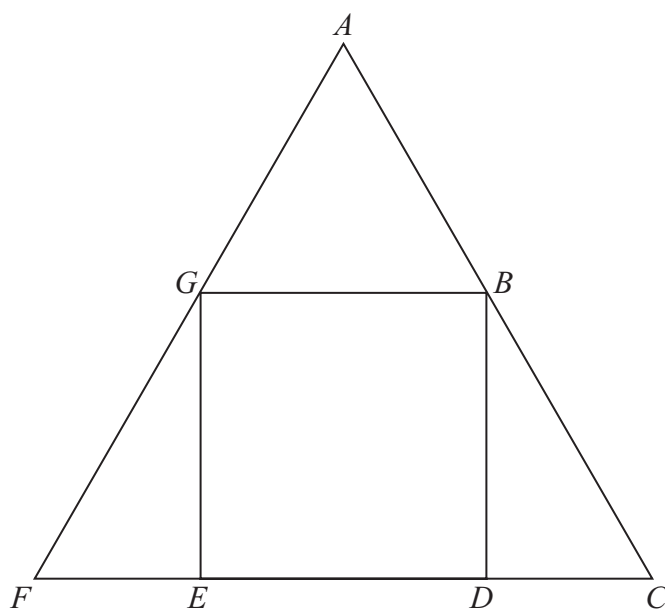
(b) find the probability that this person also uses site P.

.....
(2)

(Total for Question 18 is 3 marks)



- 19 In the diagram, ABG and ACF are equilateral triangles.
 $GBDE$ is a square of side x cm.



Find

area ABG : area ACF

Give your answer in the form $a:b + c\sqrt{d}$ where a, b, c and d are integers.
You must show all your working.



DO NOT WRITE IN THIS AREA

DO NOT WRITE IN THIS AREA

DO NOT WRITE IN THIS AREA

.....
(Total for Question 19 is 5 marks)

Turn over for Question 20



20 The functions f and g are such that

$$f(x) = 3x - 6 \qquad g(x) = \frac{2x^2}{x^2 + 1}$$

(a) Find $f^{-1}(9)$

.....
(2)

(b) Find $fg(x)$

Give your answer as a single fraction in its simplest form.

.....
(3)

(Total for Question 20 is 5 marks)

TOTAL FOR PAPER IS 80 MARKS



DO NOT WRITE IN THIS AREA

DO NOT WRITE IN THIS AREA

DO NOT WRITE IN THIS AREA

BLANK PAGE



DO NOT WRITE IN THIS AREA

DO NOT WRITE IN THIS AREA

DO NOT WRITE IN THIS AREA

BLANK PAGE

